

1.5 Angle Pairs

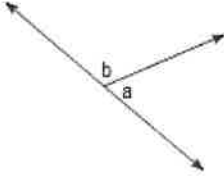
Corrective Assignment

NAME: _____

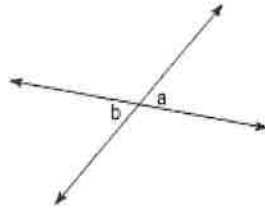
DATE: _____

Name the relationship: complementary, linear pair (supplementary), vertical, or adjacent.

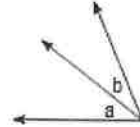
1.



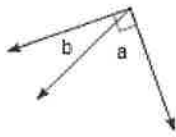
2.



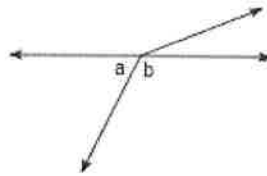
3.



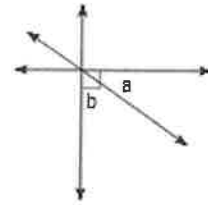
4.



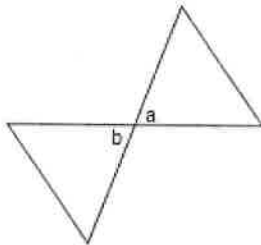
5.



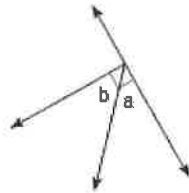
6.



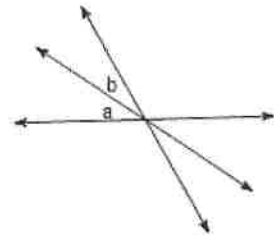
7.



8.

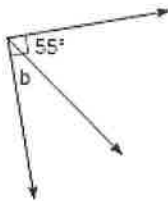


9.



Find the measure of angle b

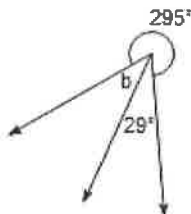
10.



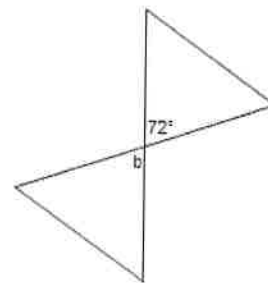
11.



12.

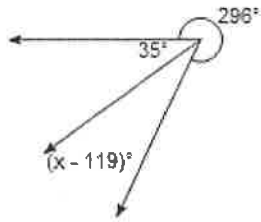


13.

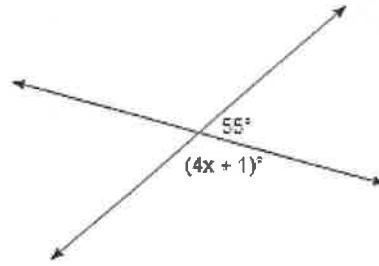


Find the value of x .

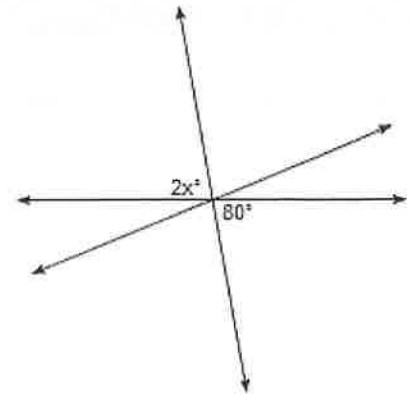
14.



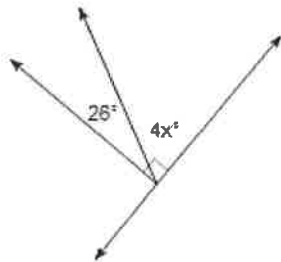
15.



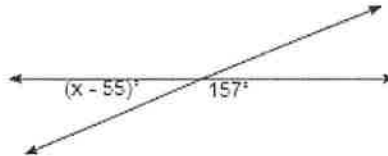
16.



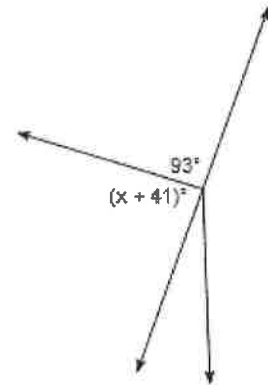
17.



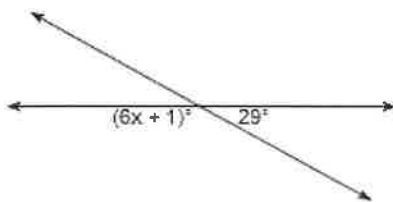
18.



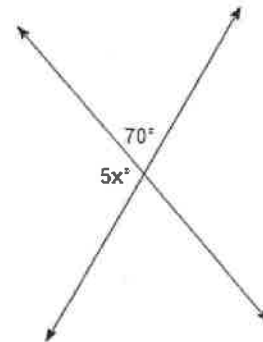
19.



20.



21.



Answers to Corrective Assignment 1.5

1. Linear Pair (Supplementary)	2. Vertical	3. Adjacent	4. Complementary
5. Linear Pair (Supplementary)	6. Complementary	7. Vertical	8. Complementary
9. Adjacent	10. 35°	11. 84°	12. 36°
13. 72°	14. 148	15. 31	16. 40
17. 16	18. 78	19. 46	20. 25
21. 22			